



Oblicz, ile minut minęło pomiędzy godzinami pokazanymi na zegarach.

19, J10, J11, J6, J7, J8, J9

wieczorem




w nocy




B10, B11, B13, B9, K9, L4, L5, L8, M6, M7

po południu




wieczorem




G12, G13, G8, H10, H11, H13

w nocy




rano




F8, F9, G10, G11, G9, D11, D12

rano




po południu




C10, C11, C9, E12, E8, F12, D8, D9

rano




po południu




E9, H13, F11, F13, F7, H9, J15, 16, 17, 18, J12, J4

rano




po południu




H12, H10, I11, I12, L6, L7, K6, K8

rano




rano




E10

rano




rano




D7, E11, E13, E7, J5, K10, K11, K5, K7

po południu




w nocy



C12, C13, C8, D10, D13

po południu



w nocy

